

Welcome to
Deep Institute



Mock Test-1(Ques.) DSSSB- Sec. A



Guided by – Sudhir Sir
sudhirdsel@gmail.com
inquiry@deepinstitute.co.in

WhatsApp icon 9999001310

2513 Basement, Hudson lane Beside HDFC Bank , Near GTB Nagar
Metro Gate - 04 Delhi -110009.

Welcome to Deep Institute

Deep Institute, Delhi

Mock Test 01

Sec. A- General Test (GT)

Total Question: 100

Maximum Time: 1 Hour

Total Mark: 100

General Intelligence & Reasoning Ability

1. **Direction :** In the following question, select the related word from the given options.

Farmer : Field :: Painter : ?

- (a) Gallery (b) Stage
(c) Theatre (d) Shop

2. **Direction :** In the following question, the relation between the letters to the left of :: is same as the relation between the letters to the right of :: . With reference to this, select the appropriate option that will replace the two '?' signs below-
STOP : TRVT :: ? : ?

- (a) MIND : IQLO (b) HAIL : PLCI
(c) SAND : UDHS (d) BANK : CCQO

3. **Direction :** In the following question, select the related number from the given options that will come in place of '?'.

60 : 15 :: 100 : ?

- (a) 45 (b) 35
(c) 5 (d) 25

4. Which number will come in place of '?' in the series given below?

10, 100, 10000, ?

- (a) 100000000 (b) 100001010
(c) 100011110 (d) None of these

5. Find the odd word from the given options.

- (a) APPLE (b) ANGLE
(c) AMPLE (d) ADORE

6. **Direction :** Read the following information carefully and answer the question given below-

1. In a family of six persons, L, M, N, F, P, Q, there are two married couples.

2. F is the grandmother of L and mother of M.

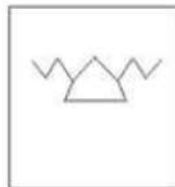
3. N is the wife of M and mother of Q.

4. Q is the grand-daughter of P.

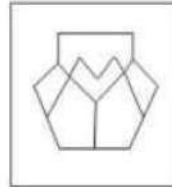
Who among the following is one of the couples?

- (a) N-F (b) P-F
(c) P-M (d) None of these

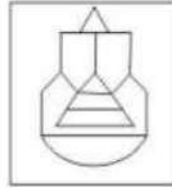
7. **Direction :** A figure is given below which is embedded inside a figure out of the four figures given in the options. Choose the appropriate option which contains the figure given below as the answer.



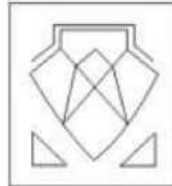
(a)



(b)



(c)



(d)




8. Which number will come in place of '?' in the series given below?

15, 30, 90, 360, ?

- (a) 720 (b) 1800
(c) 1440 (d) 1080

9. **Direction :** A figure is given below which is embedded inside a figure out of the four figures given in the options. Choose the appropriate option which contains the figure given below as the answer.



Mock Test for DSSSB- Statistical Assistant Exam-Sec.-A

Guided by – Sudhir Sir

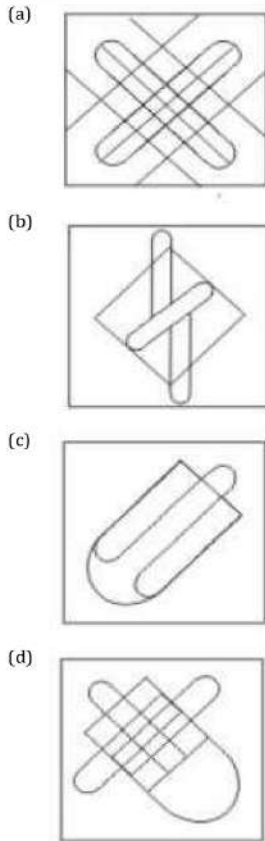
9999001310

2513 Basement, Hudson lane Beside HDFC Bank , Near GTB Nagar
Metro Gate – 04 Delhi –110009.

Deep Institute, Delhi

10

Mock Test - 1



10. Arrange the given words in the sequence in which they occur in the dictionary.

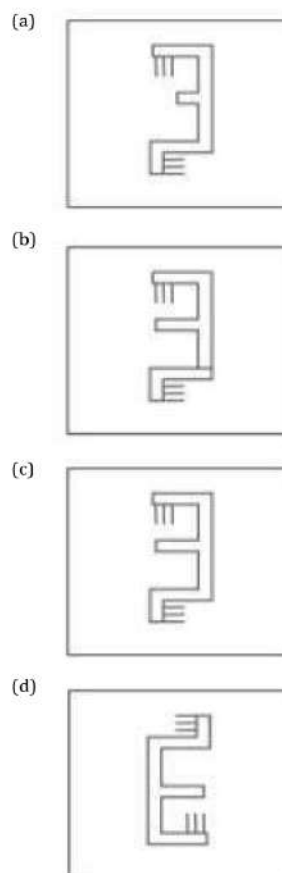
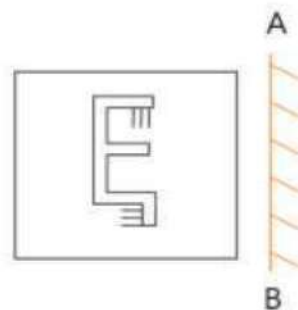
1. Habit
2. Habitat
3. Handle
4. Hammer
5. Harvest

- (a) 21453 (b) 12435
(c) 21435 (d) 14253

11. In a certain code language, FIRE is coded as DGPC. What will be the last letter of the code word for SHOT?

- (a) Q (b) R
(c) S (d) P

12. If a mirror is placed on line AB, which of the following figures shows the correct mirror image of the question figure given below?



13. Kundan travels 15 km towards south, takes a left turn and travels 10 km. He takes a left turn and travels 15 km further. How far is he from his original position?

- (a) 40 km (b) 25 km
(c) 10 km (d) 15 km

14. In a row of cars, red car is 14th from left and 23rd from right. How many cars are there in the row?

- (a) 36 (b) 37
(c) 35 (d) 34

Mock Test for DSSSB- Statistical Assistant Exam-Sec.-A

Guided by – Sudhir Sir

9999001310

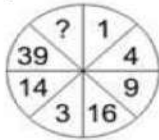
2513 Basement, Hudson lane Beside HDFC Bank , Near GTB Nagar
Metro Gate - 04 Delhi -110009.

Deep Institute, Delhi

Mock Test - 1

11

15. In the following question, select the number from the options that will come in place of '?'.



- (a) 84 (b) 91
(c) 83 (d) 95
16. Select the number that can replace the question mark (?) in the following series.
211, 215, 231, 267, ?
(a) 312 (b) 421
(c) 296 (d) 331
17. **Direction :** In the question given below, two statements are given followed by two conclusions I and II. You have to take the given statements to be true even if they seem to be at variance from the commonly known facts. Read the conclusions carefully and decide which conclusion(s) logically follow(s).
Statements :
Some poets are poems.
No poems are songs.
Conclusions :
I. Some poems are not songs.
II. Some songs are poems.
(a) Only conclusion I follows
(b) Only conclusion II follows
(c) Either conclusion I or II follows
(d) Neither conclusion I nor II follows
18. Three positions of a dice are given below. Look at them carefully and find which number is opposite to 2?
-
- (a) 6 (b) 3
(c) 4 (d) 1
19. The sum of the ages of Arjun and his daughter is 48 years. The average of the ages of Arjun, his daughter and his son is 25 years. What is the age of Arjun's son?
(a) 18 years (b) 36 years
(c) 27 years (d) 21 years
20. Gaurav walks 20 meters towards North. He then turns left and walks 40 meters. He again turns left and walks 20 meters. Further, he moves 20 meters after turning to the right. How far is he from his original position?
(a) 40 meters (b) 50 meters
(c) 60 meters (d) 70 meters
- Arithmetical & Numerical Ability**
21. The HCF of two numbers 88 and 33 is 11. Find the LCM of the numbers.
(a) 264 (b) 235
- (c) 238 (d) 246
22. How many numbers are there between 150 and 300 which are divisible by 7?
(a) 22 (b) 21
(c) 20 (d) 24
23. The ratio of speeds of two cars is 5:7. The first car travels a distance of 350 km in 5 hours. Calculate the speed of the second car (in m/s).
(a) 31.55 (b) 26.44
(c) 27.22 (d) 21.44
24. Abhi is 4 times as good a workman as Bhishma and therefore is able to finish a task in 90 days less than Bhishma. Working together, they can finish the task in-
(a) 20 days (b) 15 days
(c) 24 days (d) 30 days
25. The difference between length and breadth of a rectangle is 23 m. If the perimeter of the rectangle is 206 m, find the length of the rectangle.
(a) 54m (b) 57m
(c) 60m (d) 63m
26. The bus fare between two cities is increased in the ratio 5:7. What is the increase in the fare, if the original fare is Rs.625?
(a) Rs.875 (b) Rs.175
(c) Rs.350 (d) Rs.250
27. The average revenue of 11 consecutive years of a company is Rs.66 lakhs. If the average of the first 6 years is Rs.61 lakhs and that of the last 6 years is Rs.73 lakhs, what is the revenue for the sixth year?
(a) Rs.80 lakhs (b) Rs.76 lakhs
(c) Rs.78 lakhs (d) Rs.74 lakhs
28. If two t-shirts are given for free on purchasing one t-shirt priced Rs. 800, what is the effective discount on each t-shirt?
(a) 25% (b) 33.33%
(c) 66.67% (d) 15%
29. A man spends 68% of his income and saves the rest. What percentage of his expenditure does he save?
(a) 83.64% (b) 95.88%
(c) 92.68% (d) 47.06%
30. The ratio of edges of two cubes is 1 : 2. Find the ratio of their volumes.
(a) 1 : 8 (b) 8 : 27
(c) 27 : 8 (d) 8 : 1
31. A seller sells a watch at 5% loss. If he had bought it at 20% more and sold it for Rs.115 less, he would have incurred a loss of 40%. Find the cost price of the watch.
(a) Rs.650 (b) Rs.600
(c) Rs.550 (d) Rs.500
32. Find the value of the following expression.
$$\frac{(75.8)^2 - (55.8)^2}{20}$$

(a) 191.8 (b) 171.2
(c) 131.6 (d) 111.6
33. A missile travels at 1116 km/h. How many meters does it travel in one second?

Mock Test for DSSSB- Statistical Assistant Exam-Sec.-A

Guided by - Sudhir Sir

9999001310

2513 Basement, Hudson lane Beside HDFC Bank, Near GTB Nagar
Metro Gate - 04 Delhi -110009.

Deep Institute, Delhi

12

Mock Test - 1

- (a) 360 (b) 368
(c) 310 (d) 348
34. A sum of money invested at compound interest becomes three times of itself in 2 years. Find the rate of interest.
(a) 63.2% (b) 71.2%
(c) 64.2% (d) 73.2%
35. What is the third proportional of two numbers 4 and 28?
(a) 52 (b) 56
(c) 84 (d) 196
36. A can complete a task in 20 days and B can complete the same task in 30 days. In how many days can A and B complete 25% of the task?
(a) 6 (b) 5
(c) 4 (d) 3
37. Between 200 and 400, how many numbers are divisible by 7?
(a) 28 (b) 29
(c) 30 (d) 31
38. The ratio of cost price and selling price is 5:9. Find profit percent.
(a) 80% (b) 85%
(c) 90% (d) 95%
39. Find the value of- $\frac{(856+167)^2 + (856-167)^2}{856 \times 856 + 167 \times 167}$
(a) 689 (b) 1023
(c) 1 (d) 2
40. The price of an article is reduced by 10%. To restore it to the original price, the reduced price must be increased by-
(a) 10% (b) $9\frac{1}{11}\%$
(c) 11% (d) $11\frac{1}{9}\%$
- (c) Prem Rawat (d) Sachin Sharma
44. Who has been nominated by Rajya Sabha Chairman Jagdeep Dhankhar to the panel of Vice chairpersons in the Upper House on 21 December 2022?
(a) Anju Bobby George (b) Abhinav Bindra
(c) PT Usha (d) Shiny Abraham
45. In which year, was the Danish East India Company formed?
(a) 1614 (b) 1615
(c) 1616 (d) 1617
46. How many fundamental rights are mentioned in Indian constitution?
(a) Five (b) Six
(c) Seven (d) Eight
47. In which year was Nationalist Congress Party founded?
(a) 1949 (b) 1999
(c) 1972 (d) 1997
48. In the 42nd Constitutional Amendment 1976, which word was added to the Preamble?
(a) Democratic (b) Equality
(c) Secular (d) Federal
49. Sodium metal should be stored in-
(a) Hydrochloric acid (b) Water
(c) Kerosene oil (d) Alcohol
50. What is an exothermic reaction?
(a) The reaction in which heat is released
(b) The reaction in which heat is absorbed
(c) The reaction in which neither heat is released nor absorbed
(d) None of these
51. What are the main components of Brass Alloy?
(a) Copper and Zinc
(b) Copper and Strontium
(c) Copper, Zinc and Nickel
(d) Copper and Nickel

General Awareness

41. Which cricket ground is known as the "Home of Cricket"?
(a) Melbourne Cricket Ground
(b) Eden Park Cricket Ground
(c) Adelaide Oval Cricket Ground
(d) Lord's Cricket Ground
42. In the context of the Indian Economy, What are "Ways and Means" advances?
(a) These are part of the infrastructure projects financing mechanism by the National Investment and Infrastructure Fund
(b) These are loans advanced by the World Bank to developing economies
(c) These are temporary loans advanced by RBI to central and state governments
(d) These are loans advanced by the IMF to overcome the financial crisis
43. Which Indian author has launched his book titled 'Hear Yourself' for the Indian subcontinent in Mumbai?
(a) Bhanu Sing (b) Vijay Bhardwaj
52. Which gas does a fire extinguisher emit?
(a) Carbon monoxide (b) Chlorine
(c) Carbon dioxide (d) Nitrogen
53. Who prepared the draft of Quit India Resolution?
(a) Vallabhbhai Patel (b) Jawaharlal Nehru
(c) Acharya Kripalani (d) None of these
54. Where were the hymns of Rig Veda composed?
(a) Punjab (b) Gujarat
(c) Rajasthan (d) Uttar Pradesh
55. Who can remove the Vice-President from his office?
(a) President (b) Prime minister
(c) Supreme Court (d) None of these
56. Which of the following articles deals with the election of the Vice-President?
(a) Article 64 (b) Article 68
(c) Article 66 (d) Article 62
57. In which state is "Luddi" dance performed?
(a) Punjab (b) Madhya Pradesh

Mock Test for DSSSB- Statistical Assistant Exam-Sec.-A

Guided by – Sudhir Sir

9999001310

2513 Basement, Hudson lane Beside HDFC Bank, Near GTB Nagar
Metro Gate - 04 Delhi -110009.

Deep Institute, Delhi

Mock Test - 1

13

- (c) Haryana (d) None of these
58. Which of the following countries is not a member of SAARC?
(a) Pakistan (b) India
(c) China (d) Sri Lanka
59. Which instrument is used for measuring the purity of milk?
(a) Lactometer (b) Cryometer
(c) Cyanometer (d) Barometer
60. Which layer of the earth's atmosphere contains the ozone layer?
(a) Troposphere (b) Mesosphere
(c) Ionosphere (d) Stratosphere

English Language & Comprehension

61. **Direction :** In the following question, out of the four options, select the option which is the best substitute of the phrase given below-
Average in amount or quality.
(a) Moderate (b) Supernatant
(c) Hobble (d) Hum
62. **Direction :** In the following question, out of the four options, select the option which is the best substitute of the phrase given below-
To make a person or animal go away by waving one's arms at them.
(a) Scram (b) Shoo
(c) Vamoose (d) Scoot
63. **Direction :** In the following question, out of the four options, choose the one which best expresses the meaning of the given word.
DISCERNING
(a) Naive (b) Asinine
(c) Inept (d) Astute
64. **Direction :** In the following question, out of the four options, choose the one which best expresses the meaning of the given word.
SUCCULENT
(a) Torrid (b) Luscious
(c) Arid (d) Bare
65. **Direction :** In the following question, out of the four options, choose the one which best expresses the meaning of the given word.
ARTICULATE
(a) Dominate (b) Distinct
(c) Helper (d) Unsteady
66. **Direction :** In the following question, out of the four options, choose the one which best expresses the same meaning to that of the given word.
INTROVERT
(a) Loner (b) Socialize
(c) Elite (d) Indecent
67. **Direction :** In the following question, out of the four options, choose the one which best expresses the meaning opposite to that of the given word.
LIBERTY
(a) Bondage (b) Choice
- (c) License (d) Right
68. **Direction :** In the following question, out of the four options, choose the one which best expresses the meaning opposite to that of the given word.
INTRINSIC
(a) Elemental (b) Innate
(c) Talented (d) Acquired
69. **Direction :** In the following question, an idiom is given followed by four options. Choose the option which best expresses the meaning of the idiom as your answer-
A dime a dozen
(a) Strength is in numbers
(b) People who say bad things have no value
(c) Very common and of no particular value
(d) You save more if you buy in large numbers
70. **Direction :** In the following question, an idiom is given followed by four options. Choose the option which best expresses the meaning of the idiom as your answer-
A drop in the bucket
(a) So much silence that even a drop can be heard
(b) A very small amount compared to what is needed
(c) The final act before the task is done
(d) A small favor is worth a lot to a person in trouble
71. **Direction :** Fill in the blank with the correct word in order to make the sentence grammatically correct.
Each of the girls _____ received an award.
(a) does (b) is
(c) has (d) were
72. **Direction :** Fill in the blank with the correct word in order to make the sentence grammatically correct.
Anyone _____ write a poem on this topic.
(a) can (b) may
(c) ought (d) never
73. **Direction :** Fill in the blank with the correct word in order to make the sentence grammatically correct.
It is possible that Christopher Marlowe _____ have written plays for Shakespeare.
(a) might (b) should
(c) will (d) None of these
74. **Direction :** In the following question, a part of the sentence may have an error. Find out which part of the sentence has an error and select the appropriate option. If a sentence is free from error, select the fourth option as the answer-
My brother finds it difficult (1)/ to pass away the time (2)/ at our grandparent's house. (3)/ No Error (4)
(a) 1 (b) 2
(c) 3 (d) 4
75. **Direction :** In the following question, a part of the sentence may have an error. Find out which part of the sentence has an error and select the appropriate option. If a sentence is free from error, select the fourth option as the answer-
No sooner had he finished (1)/ his morning walk (2)/ when it began to rain. (3)/ No Error (4)
(a) 1 (b) 2
(c) 3 (d) 4

Mock Test for DSSSB- Statistical Assistant Exam-Sec.-A

Guided by – Sudhir Sir

9999001310

2513 Basement, Hudson lane Beside HDFC Bank , Near GTB Nagar
Metro Gate - 04 Delhi -110009.

76. **Direction** : In the following question, four words are given. Out of them, one word is incorrectly spelt. Find the incorrectly spelt word.

- (a) Surveillance (b) Stupefaction
(c) Preferential (d) Mandatory

77. **Direction** : In the following question, four words are given. Out of them, one word is incorrectly spelt. Find the incorrectly spelt word.

- (a) Fractional (b) Obsolete
(c) Acquired (d) Pracious

Ques (78-80): Direction : Read the passage given below carefully and answer the question given below-

If you wish to be a writer, you must learn to develop your own point of view. All good writers make us see things in a different light. You may be writing about the same thing as your classmates, but your presentation must reflect your personality and individuality. There are so many interesting subjects you can write about in different forms but here we will try to attempt writing short stories. There is a good market for the following types: the humorous stories, the adventurous stories, the domestic stories, the mysteries and stories related to animals and strange experiences. Don't worry if your story turns out to be short, some of the best stories are quite short. Be very careful about the climax or end of the story. It must be what the reader fears, desires, expects or best of all doesn't expect. So, get down to it. Think of a plot, make points on how the story will progress and pen it down.

78. The most important thing about being a writer is-

- (a) You must have a pen and paper
(b) You must have a degree in writing
(c) You must have a painful heart
(d) You must learn to develop your own point of view

79. The narrator advises the reader to write in order to-

- (a) Earn a livelihood
(b) Show his intelligence to others
(c) Make him famous among his people
(d) Encourage him to become a writer

80. Most of the people like to read-

- (a) Love stories
(b) Humorous and adventurous stories
(c) Social stories
(d) Horror stories

Hindi Language & Comprehension

81. "बेईसाफी" में प्रयुक्त उपसर्ग है-

- (a) बे (b) इन
(c) बेइ (d) बेइन

82. "बहाव" शब्द में प्रयुक्त प्रत्यय कौन सा है?

- (a) बह (b) हाव
(c) आव (d) आवा

83. "भवानी" का पुल्लिंग है-

- (a) भवा (b) भावी
(c) भव (d) इनमें से कोई नहीं

84. "कमरा" शब्द का बहुवचन है-

- (a) कमरें (b) कमराओ
(c) कामराये (d) इनमें से कोई नहीं

85. "पथभ्रष्ट" में कौन सा समास है?

- (a) अव्ययीभाव (b) द्वन्द्व
(c) तत्पुरुष (d) कर्मधारय

86. "पक्षी" का उचित पर्यायवाची शब्द है-

- (a) दृग (b) विप्र
(c) खग (d) व्योम

87. "अतिथि" का उचित पर्यायवाची शब्द है-

- (a) नगर (b) ग्रामवासी
(c) आगंतुक (d) इनमें से कोई नहीं

88. निम्नलिखित विकल्पों में से "आलोक" का विलोम है-

- (a) अद्भुत (b) अज्ञात
(c) अंधकार (d) इनमें से कोई नहीं

89. निम्नलिखित विकल्पों में से "बंधन" का विलोम है-

- (a) प्रवर (b) मोक्ष
(c) विमुख (d) विरह

90. निम्नलिखित विकल्पों में से "विस्तार" का विलोम है-

- (a) लघु (b) संक्षेप
(c) सूक्ष्म (d) इनमें से कोई नहीं

91. "तरनि तनूजा तट तमाल तरुवर बहु छाए" में कौन-सा अलंकार है?

- (a) अनुप्रास (b) यमक
(c) उत्प्रेक्षा (d) उपमा

92. "चरण कमल बंदौ हरिराई" में कौन सा अलंकार है?

- (a) श्लेष (b) उपमा
(c) रूपक (d) अतिशयोक्ति

93. निराशा का सही संधि विच्छेद है-

- (a) निरा + आशा (b) निर + आशा
(c) निः + आशा (d) निरः + आशा

94. "बुरी तरह हारना" के लिए सही मुहावरा है-

- (a) मुंह खून लगना (b) मुंह ताकना
(c) मुंह की खाना (d) मुंह उतरना

95. "छाती पर मूँग दलना" का अर्थ है-

- (a) कठिन काम करना (b) बात-बात पर लड़ना
(c) पास रहकर दुःख देना (d) इनमें से कोई नहीं

96. "वानर" का तद्भव रूप है-

- (a) बन्दर (b) बांदर
(c) बान्दर (d) इनमें से कोई नहीं

97. नीचे दिए गए वाक्य के लिए उपयुक्त एक शब्द का चयन कीजिए- जिसका संबंध पृथ्वी से हो

- (a) पार्थिव (b) यायावर
(c) पृथ्व्य (d) युयुत्सु

Ques (98-100): निर्देश : नीचे दिए गए प्रश्न में, एक गद्यांश दिया गया है।

गद्यांश को ध्यान से पढ़ें और उसके निचे दिए गए प्रश्न का उत्तर दें- मेरे मकान के आगे चौराहे पर ढाबे के आगे फुटपाथ पर खाना खाने वाले लोग बैठते हैं- रिक्शेवाले, मजदूर, फेरीवाले, कबाड़ी वाले। आना-जाना लगा ही रहता है। लोग कहते हैं- "आपको बुरा नहीं लगता? लोग सड़क पर गंदगी फैला रहे हैं और आप इन्हें बरदाश्त कर रहे हैं? इनके कारण पूरे मोहल्ले की आबोहवा खराब हो रही है।" मैं उनकी बातों को हल्के में ही लेता हूँ। मुझे पता है कि यहाँ जो लोग जुटते हैं वे गरीब लोग होते हैं। अपने काम-धाम के बीच रोटी खाने चले आते हैं और खाकर चले जाते हैं। ये आमतौर पर बिहार से आए गरीब ईमानदार लोग हैं जो हमारे इस परिसर के स्थायी सदस्य हो गए हैं। ये उन अशिष्ट अमीरों से भिन्न हैं जो साधारण-सी बात पर भी हंगामा खड़ा कर देते हैं। लोगों के पास पैसा तो आ गया पर धनी होने का स्वर नहीं आया। अधजल गमरी छलकत जाए

Deep Institute, Delhi

Mock Test - 1

15

की तर्ज पर इनमें दिखावे की भावना उबल खाती है। असल में यह ढाबा हमें भी अपने माहौल से जोड़ता है। मैं लेखक हूँ तो क्या हुआ? गाँव के एक सामान्य घर से आया हुआ व्यक्ति हूँ। बचपन में गाँव-घरों की गरीबी देखी है और भोगी भी है। खेतों की मिट्टी में रमा हूँ, वह मुझमें रमी है। आज भी उस मिट्टी को झाड़झुड़ कर भले ही शहरी बनने की कोशिश करता हूँ, बन नहीं पाता। वह मिट्टी बाहर से चाहे न दिखाई दे, अपनी महक और रसमयता से वह मेरे भीतर बसी हुई है। इसीलिए मुझे मिट्टी से जुड़े ये तमाम लोग भाते हैं। इस दुनिया में कहा-सुनी होती है, हाथपाई भी हो जाती है लेकिन कोई किसी के प्रति गौंठ नहीं बाँधता। दुसरे-तीसरे ही दिन परस्पर हँसते-बतियाते और एक-दूसरे के दुःख-दर्द में शामिल होते दिखाई पड़ते हैं। ये सभी कभी-न-कभी एक-दूसरे से लड़ चुके हैं लेकिन कभी प्रतीत नहीं होती कि ये लड़ चुके हैं। कल के गुस्से को अगले दिन धूल की तरह झाड़कर फेंक देते हैं।

98. लेखक, लोगों की शिकायतों को हल्के में लेता है क्योंकि-

- (a) शिकायत करना लोगों की आदत होती है
- (b) वह किसी बात को गंभीरता से नहीं लेता
- (c) लेखक उन्हें जानता-पहचानता है
- (d) जुटने वाले लोग गरीब और ईमानदार हैं

99. साधारण बात पर भी हंगामा कौन खड़ा कर देते हैं?

- (a) लेखक के परिचित लोग (b) अशिष्ट रेहड़ी-पटरी वाले
- (c) गाँव से आए गरीब मजदूर (d) अमीर किन्तु असभ्य लोग

100. लोग लेखक से क्यों पूछते हैं कि "क्या आपको बुरा नहीं लगता?"

- (a) वे लोग आसपास गंदगी बिखेर देते हैं
- (b) वे लेखक से रुष्ट रहते हैं
- (c) उन्हें गरीबों से मेल-जोल पसंद नहीं
- (d) वे बुरे लोग हैं

// Smart Answer Sheet //

Correct Percentage of students who answered correctly.

Skipped Percentage of students who skipped.

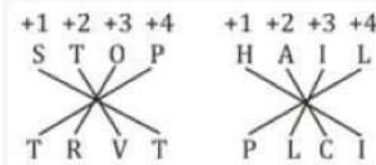
Q.	Ans.	Correct	Q.	Ans.	Correct	Q.	Ans.	Correct
		Skipped			Skipped			Skipped
1	A	83.33%	2	B	5.56%	3	D	80.56%
		0.0%			8.33%			11.11%
4	A	80.56%	5	D	44.44%	6	B	66.67%
		11.11%			11.12%			11.11%
7	D	55.56%	8	B	83.33%	9	A	44.44%
		13.88%			16.67%			16.67%
10	B	69.44%	11	B	69.44%	12	C	44.44%
		16.67%			16.67%			16.67%
13	C	63.89%	14	A	72.22%	15	A	19.44%
		16.67%			16.67%			16.67%
16	D	58.33%	17	A	33.33%	18	A	44.44%
		16.67%			16.67%			16.67%
19	C	38.89%	20	C	58.33%	21	A	47.22%
		16.67%			16.67%			13.89%
22	B	19.44%	23	C	19.44%	24	C	8.33%
		22.23%			22.23%			27.78%
25	D	25.0%	26	D	8.33%	27	C	13.89%
		30.56%			30.56%			30.55%
28	C	11.11%	29	D	16.67%	30	A	33.33%
		30.56%			30.55%			30.56%
31	D	2.78%	32	C	19.44%	33	C	25.0%
		33.33%			33.34%			33.33%
34	D	2.78%	35	D	22.22%	36	D	25.0%
		33.33%			33.34%			33.33%
37	B	8.33%	38	A	25.0%	39	D	13.89%
		33.34%			36.11%			36.11%
40	D	19.44%	41	D	5.56%	42	C	13.89%
		38.89%			19.44%			27.78%
43	C	8.33%	44	C	19.44%	45	C	13.89%
		27.78%			27.78%			27.78%
46	B	38.89%	47	B	2.78%	48	C	47.22%
		27.78%			27.78%			27.78%

49	C	30.56%	50	A	30.56%	51	A	33.33%
		27.77%			30.55%			30.56%
52	C	30.56%	53	B	2.78%	54	A	8.33%
		30.55%			30.55%			30.56%
55	C	19.44%	56	C	8.33%	57	A	19.44%
		30.56%			30.56%			30.56%
58	C	27.78%	59	A	55.56%	60	D	30.56%
		30.55%			30.55%			27.77%
61	A	58.33%	62	B	19.44%	63	D	5.56%
		27.78%			27.78%			27.77%
64	B	36.11%	65	B	13.89%	66	A	44.44%
		27.78%			27.78%			27.78%
67	A	41.67%	68	D	27.78%	69	C	11.11%
		27.77%			27.78%			27.78%
70	B	30.56%	71	C	36.11%	72	A	66.67%
		27.77%			27.78%			27.77%
73	A	33.33%	74	B	22.22%	75	C	13.89%
		27.78%			27.78%			30.55%
76	A	13.89%	77	D	44.44%	78	D	52.78%
		30.55%			30.56%			30.55%
79	D	38.89%	80	B	50.0%	81	A	52.78%
		30.55%			30.56%			27.78%
82	C	55.56%	83	C	38.89%	84	A	61.11%
		27.77%			27.78%			27.78%
85	C	47.22%	86	C	55.56%	87	C	55.56%
		27.78%			27.77%			27.77%
88	C	44.44%	89	B	27.78%	90	B	47.22%
		27.78%			27.78%			27.78%
91	A	63.89%	92	C	27.78%	93	C	47.22%
		27.78%			27.78%			27.78%
94	C	58.33%	95	C	41.67%	96	A	58.33%
		27.78%			27.77%			27.78%
97	A	44.44%	98	D	52.78%	99	D	44.44%
		27.78%			27.78%			27.78%
100	A	55.56%						
		27.77%						

// Hints and Solutions //

1(A). A farmer works in a field and a painter works in a gallery.

2(B).



3(D).

Given-
 $60 : 15 :: 100 : ?$
 The logic applied is-
 $\Rightarrow 15 = \frac{60}{4}$
 On applying the same logic,
 $\Rightarrow ? = \frac{100}{4}$
 $\Rightarrow ? = 25$
 25 will come in place of '?'.

4(A).

The series given is-
 10, 100, 10000, ?
 The pattern followed is-
 $\Rightarrow (10)^2 = 100$
 $\Rightarrow (100)^2 = 10000$
 On following the same pattern,
 $\Rightarrow (10000)^2 = ?$
 $\Rightarrow 100000000 = ?$

5(D).

The words APPLE, ANGLE and AMPLE have three

Mock Test for DSSSB- Statistical Assistant Exam-Sec.-A

Guided by – Sudhir Sir

9560402898

2513 Basement, Hudson lane Beside HDFC Bank , Near GTB Nagar
 Metro Gate – 04 Delhi –110009.



Address: 2513, Basement, Hudson Lane
Opp. Laxmi Dairy, GTB Nagar
New Delhi 110009

Email id: sudhirdse1@gmail.com,
info@deepinstitute.co.in

Phone: 011-47511310

Mobile: 9560402898 (Neha Ma'am)
9999001310 (Sudhir Sir)

Visit: <https://www.deepinstitute.co.in/>



Address: 2513, Basement, Hudson Lane
Opp. Laxmi Dairy, GTB Nagar
New Delhi 110009

Email id: sudhirdse1@gmail.com,
info@deepinstitute.co.in

Phone: 011-47511310

Mobile: 9560402898 (Neha Ma'am)
9999001310 (Sudhir Sir)

Visit: <https://www.deepinstitute.co.in/>